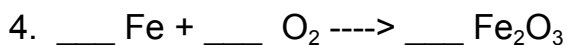
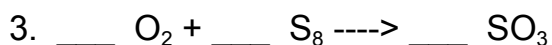



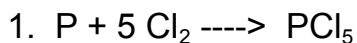
Science 10: Balancing Chemical Equations

Name: _____

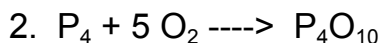
Balance the following equations:



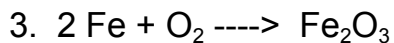
Determine if the following equations are balanced. If they aren't, correct the equation.



Correct? Yes No



Correct? Yes No



Correct? Yes No

Balance the following Equations:

